

NAME _____

DATE _____

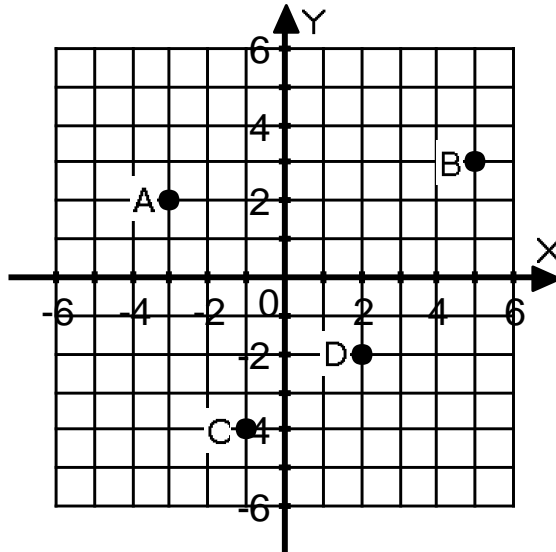
GRAPHING: Worksheet 4

Name the quadrants the following points are in.

- 1) A
- 2) D

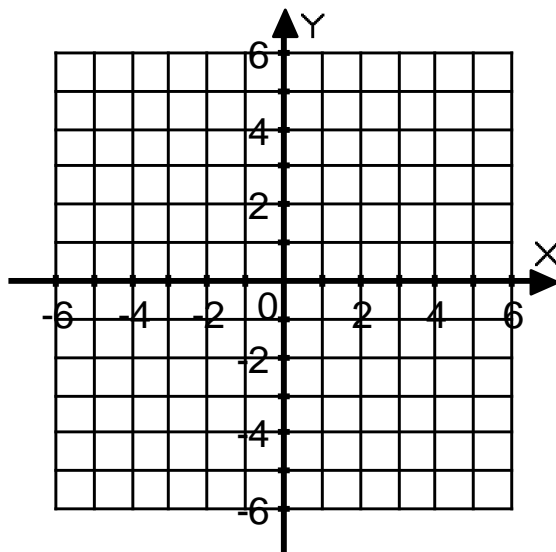
Give the coordinates of the following points.

- 3) A
- 4) B
- 5) C
- 6) D



Graph the following points.

- 7) E(0,3)
- 8) F(-4,-5)
- 9) G(-4,1)
- 10) H(2,-4)



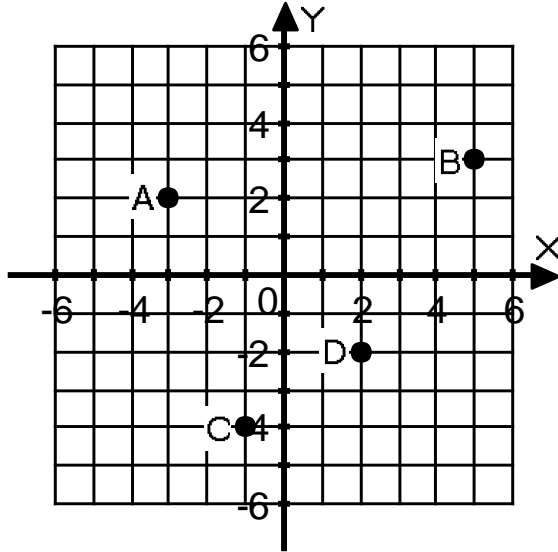
KEY
GRAPHING: Worksheet 4

Name the quadrants the following points are in.

- 1) A Quadrant 2
- 2) D Quadrant 4

Give the coordinates of the following points.

- 3) A(-3,2)
- 4) B(5,3)
- 5) C(-1,-4)
- 6) D(2,-2)



Graph the following points.

- 7) E(0,3)
- 8) F(-4,-5)
- 9) G(-4,1)
- 10) H(2,-4)

