

NAME _____

DATE _____

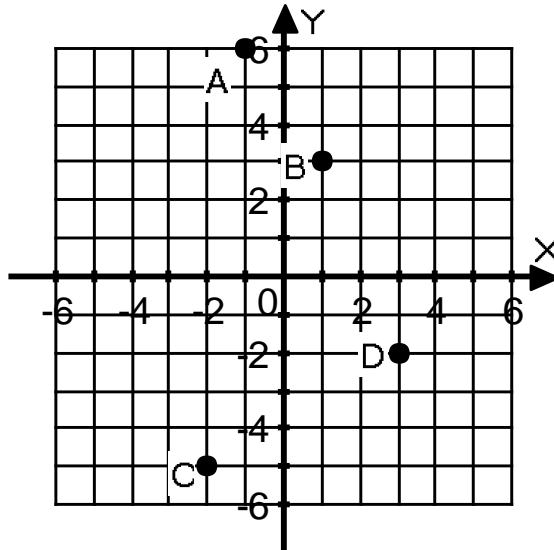
GRAPHING: Worksheet 3

Name the quadrants the following points are in.

- 1) A
- 2) C

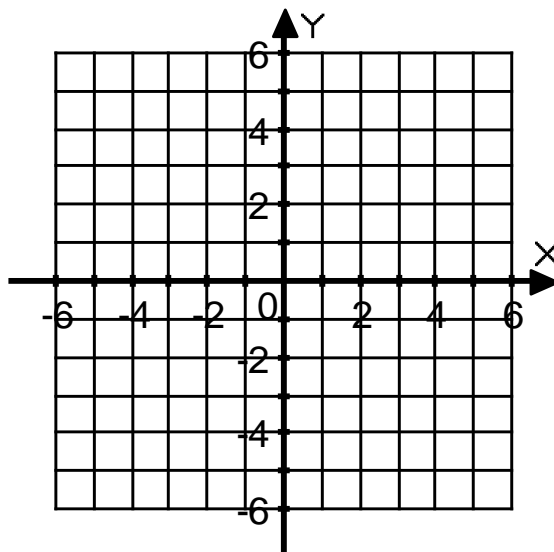
Give the coordinates of the following points.

- 3) A
- 4) B
- 5) C
- 6) D



Graph the following points.

- 7) E(0,-4)
- 8) F(-1,-5)
- 9) G(-5,2)
- 10) H(4,-1)



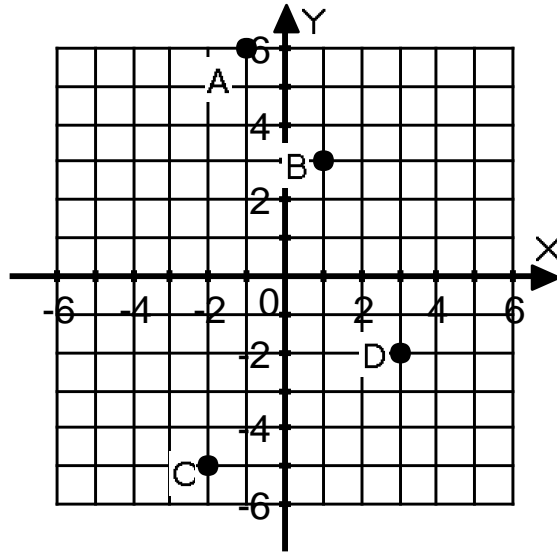
KEY
GRAPHING: Worksheet 3

Name the quadrants the following points are in.

- 1) A Quadrant 2
- 2) C Quadrant 3

Give the coordinates of the following points.

- 3) A(-1,6)
- 4) B(1,3)
- 5) C(-2,-5)
- 6) D(3,-2)



Graph the following points.

- 7) E(0,-4)
- 8) F(-1,-5)
- 9) G(-5,2)
- 10) H(4,-1)

