

NAME _____

DATE _____

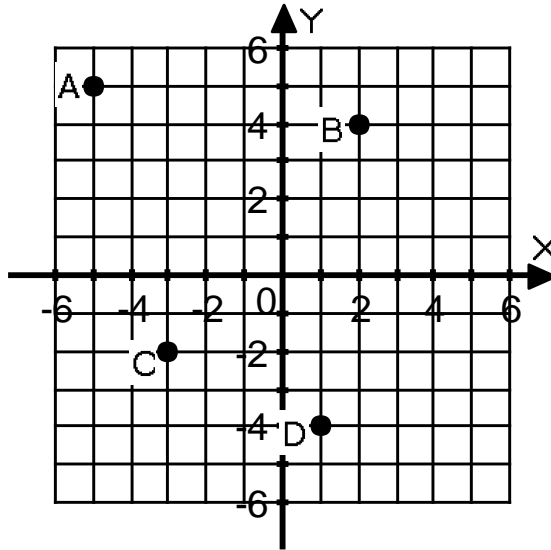
GRAPHING: Worksheet 2

Name the quadrants the following points are in.

- 1) C
- 2) B

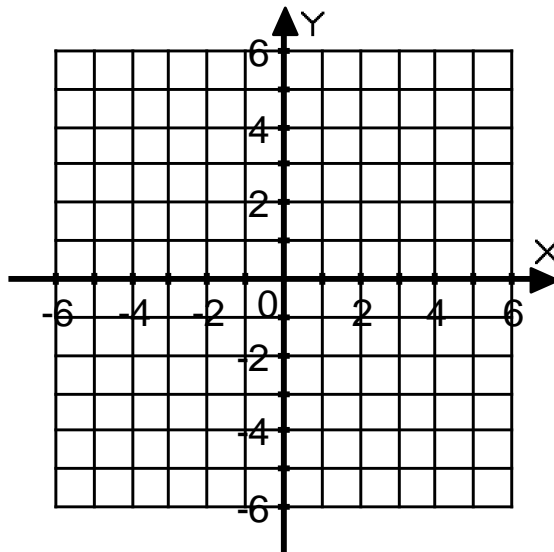
Give the coordinates of the following points.

- 3) A
- 4) B
- 5) C
- 6) D



Graph the following points.

- 7) E(-3,0)
- 8) F(-5,-3)
- 9) G(-3,4)
- 10) H(4,-3)



KEY

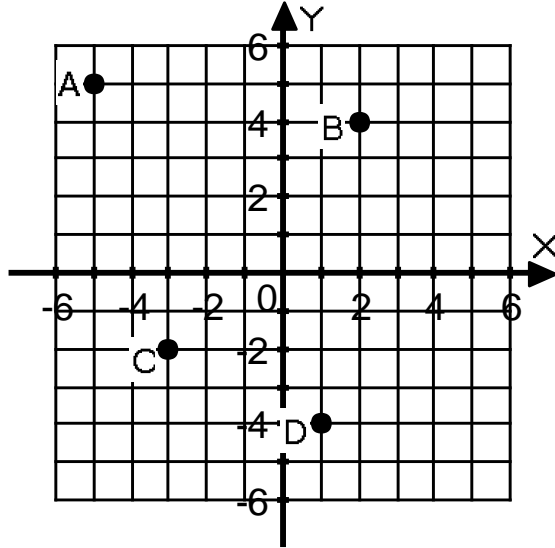
GRAPHING: Worksheet 2

Name the quadrants the following points are in.

- 1) C Quadrant 3
- 2) B Quadrant 1

Give the coordinates of the following points.

- 3) A(-5,5)
- 4) B(2,4)
- 5) C(-3,-2)
- 6) D(1,-4)



Graph the following points.

- 7) E(-3,0)
- 8) F(-5,-3)
- 9) G(-3,4)
- 10) H(4,-3)

